


數學遊戲-代數

以下的圖案都代表一個數字，請計算以下數式。







1.  +  =

9.  +  =

2.  +  =

10.  +  =

3.  +  =

11.  +  =

4.  +  =

12.  +  =



5.  +  =

13.  +  =

6.  +  =

14.  +  =

7.  +  =


15.  +  =

































8.  +  =

16.  +  =

數學遊戲-代數

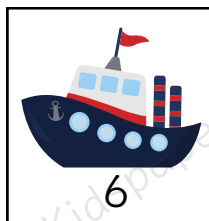





以下的圖案都代表一個數字，請計算以下數式。



1.  +  =
2.  +  =
3.  +  =
4.  +  =
5.  +  =
6.  +  =
7.  +  =
8.  +  =
9.  +  =
10.  +  =
11.  +  =
12.  +  =
13.  +  =
14.  +  =
15.  +  =
16.  +  =

數學遊戲-代數

以下的圖案都代表一個數字，請計算以下數式。



1.  +  =

9.  +  =

2.  +  =

10.  +  =

3.  +  =

11.  +  =

4.  +  =

12.  +  =

5.  +  =

13.  +  =

6.  +  =

14.  +  =

7.  +  =

15.  +  =

8.  +  =

16.  +  =