


數學遊戲-座標

以下是遊樂場地圖，請幫助旅客找出不同設施的座標。

	A	B	C	D	E	F	G	H	I
1									
2									
3									
4									
5									
6									
7									
8									
9									



( A , 1 )



( \_\_\_\_\_ , \_\_\_\_\_ )



( \_\_\_\_\_ , \_\_\_\_\_ )



( \_\_\_\_\_ , \_\_\_\_\_ )




( \_\_\_\_\_ , \_\_\_\_\_ )



( \_\_\_\_\_ , \_\_\_\_\_ )



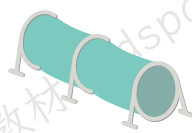
( \_\_\_\_\_ , \_\_\_\_\_ )



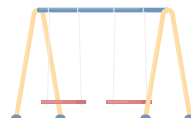
( \_\_\_\_\_ , \_\_\_\_\_ )



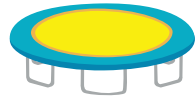
( \_\_\_\_\_ , \_\_\_\_\_ )



( \_\_\_\_\_ , \_\_\_\_\_ )




( \_\_\_\_\_ , \_\_\_\_\_ )



( \_\_\_\_\_ , \_\_\_\_\_ )

數學遊戲-座標

以下是尋寶圖，請幫助找出不同寶物的座標。

	A	B	C	D	E	F	G	H	I
1									
2									
3									
4									
5									
6									
7									
8									
9									



(A, 1)

(\_\_, \_\_)

(\_\_, \_\_)

(\_\_, \_\_)

(\_\_, \_\_)

(\_\_, \_\_)



(\_\_, \_\_)

(\_\_, \_\_)

(\_\_, \_\_)













(\_\_, \_\_)

(\_\_, \_\_)

(\_\_, \_\_)

數學遊戲-座標

以下是動物園的地圖，請幫助找出不同動物所在的座標。

	A	B	C	D	E	F	G	H	I
1									
2									
3									
4									
5									
6									
7									
8									
9									



( A , 1 )

( \_\_\_\_\_ , \_\_\_\_\_ )

( \_\_\_\_\_ , \_\_\_\_\_ )

( \_\_\_\_\_ , \_\_\_\_\_ )

( \_\_\_\_\_ , \_\_\_\_\_ )

( \_\_\_\_\_ , \_\_\_\_\_ )



( \_\_\_\_\_ , \_\_\_\_\_ )

( \_\_\_\_\_ , \_\_\_\_\_ )

( \_\_\_\_\_ , \_\_\_\_\_ )













( \_\_\_\_\_ , \_\_\_\_\_ )

( \_\_\_\_\_ , \_\_\_\_\_ )

( \_\_\_\_\_ , \_\_\_\_\_ )

數學遊戲-座標

以下是植物園的地圖，請幫找出不同植物和設施所在的座標。

	A	B	C	D	E	F	G	H	I
1									
2									
3									
4									
5									
6									
7									
8									
9									



( A , 1 )


( \_\_\_\_\_ , \_\_\_\_\_ )

( \_\_\_\_\_ , \_\_\_\_\_ )

( \_\_\_\_\_ , \_\_\_\_\_ )

( \_\_\_\_\_ , \_\_\_\_\_ )

( \_\_\_\_\_ , \_\_\_\_\_ )



( \_\_\_\_\_ , \_\_\_\_\_ )

( \_\_\_\_\_ , \_\_\_\_\_ )

( \_\_\_\_\_ , \_\_\_\_\_ )













( \_\_\_\_\_ , \_\_\_\_\_ )

( \_\_\_\_\_ , \_\_\_\_\_ )

( \_\_\_\_\_ , \_\_\_\_\_ )

數學遊戲-座標

以下是水族館的地圖，請幫找出不同海洋生物和設施所在的座標。

	A	B	C	D	E	F	G	H	I
1									
2									
3									
4									
5									
6									
7									
8									
9									



(A, 1)



(\_\_, \_\_)



(\_\_, \_\_)



(\_\_, \_\_)



(\_\_, \_\_)



(\_\_, \_\_)



(\_\_, \_\_)



(\_\_, \_\_)



(\_\_, \_\_)



(\_\_, \_\_)



(\_\_, \_\_)



(\_\_, \_\_)